



Cambridge International AS & A Level

GEOGRAPHY

9696/33

Paper 3 Advanced Physical Geography Options

May/June 2023

INSERT

1 hour 30 minutes

INFORMATION

- This insert contains all the resources referred to in the questions.
- You may annotate this insert and use the blank spaces for planning. **Do not write your answers** on the insert.



This document has **8** pages. Any blank pages are indicated.

Fig. 1.1 for Question 1

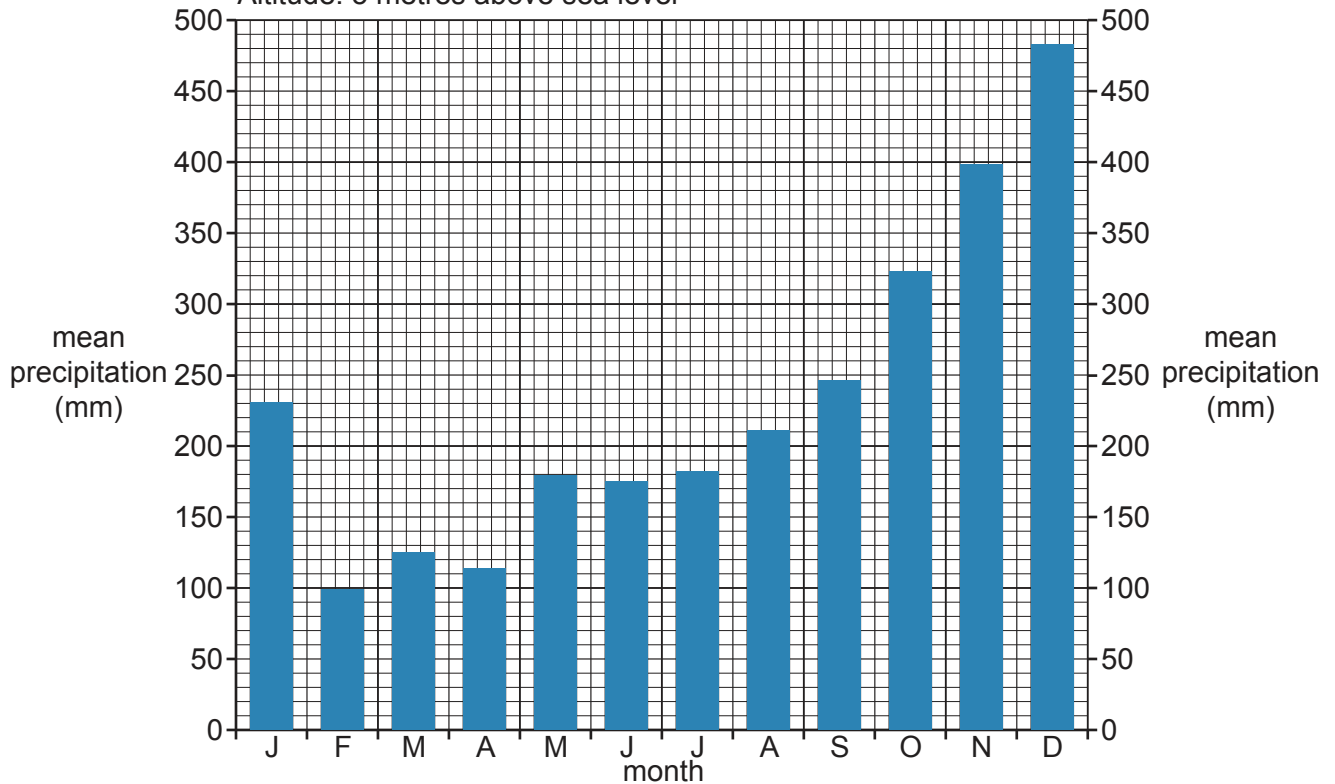
Mean precipitation data for two tropical locations

Location A: Pasir Puteh, Kelantan, Malaysia

Latitude: 6 °N

Total annual precipitation: 2766 mm

Altitude: 5 metres above sea level



Location B: Kalyan-Dombivli, Maharashtra, India

Latitude: 19 °N

Total annual precipitation: 1439 mm

Altitude: 2 metres above sea level

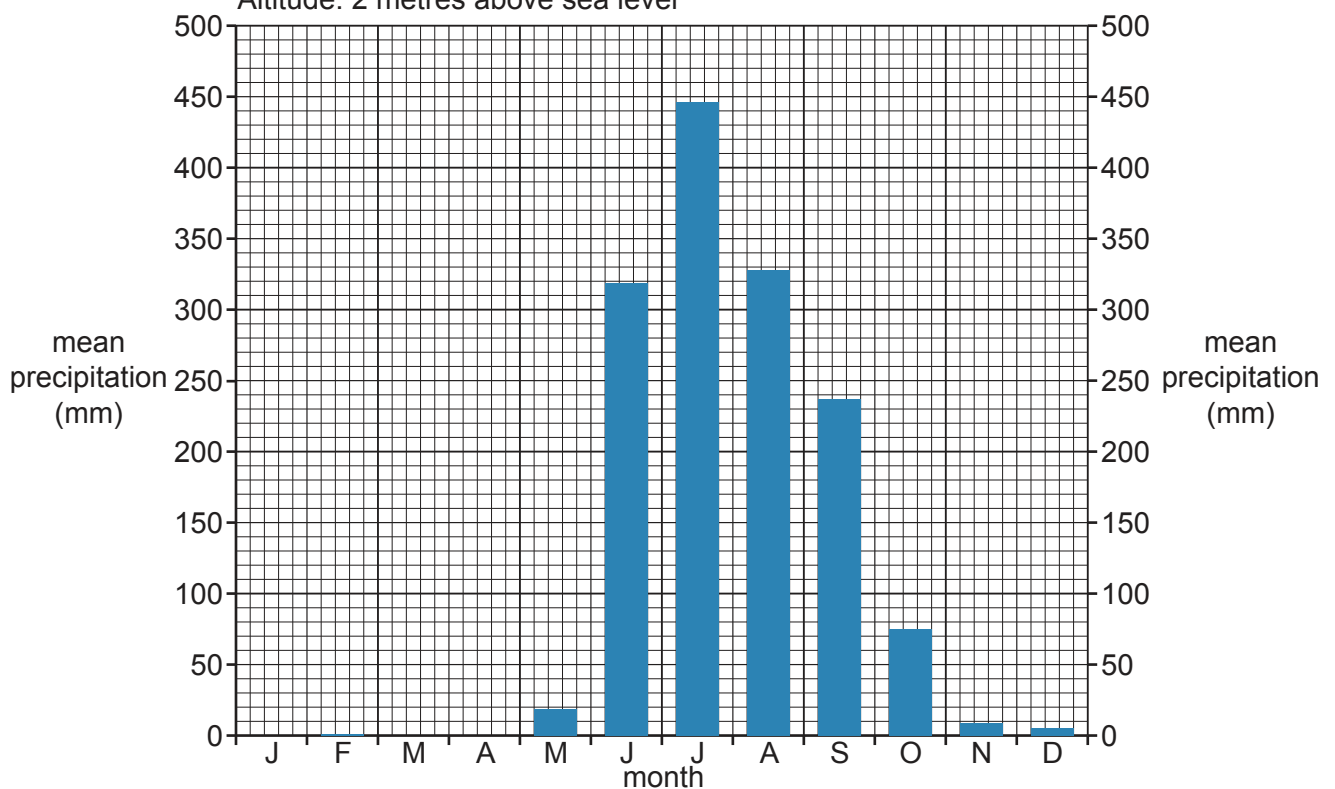


Fig. 4.1 for Question 4

A model of how waves change as they move towards the shore

Content removed due to copyright restrictions.

Fig. 7.1 for Question 7

A diagram of a mass movement

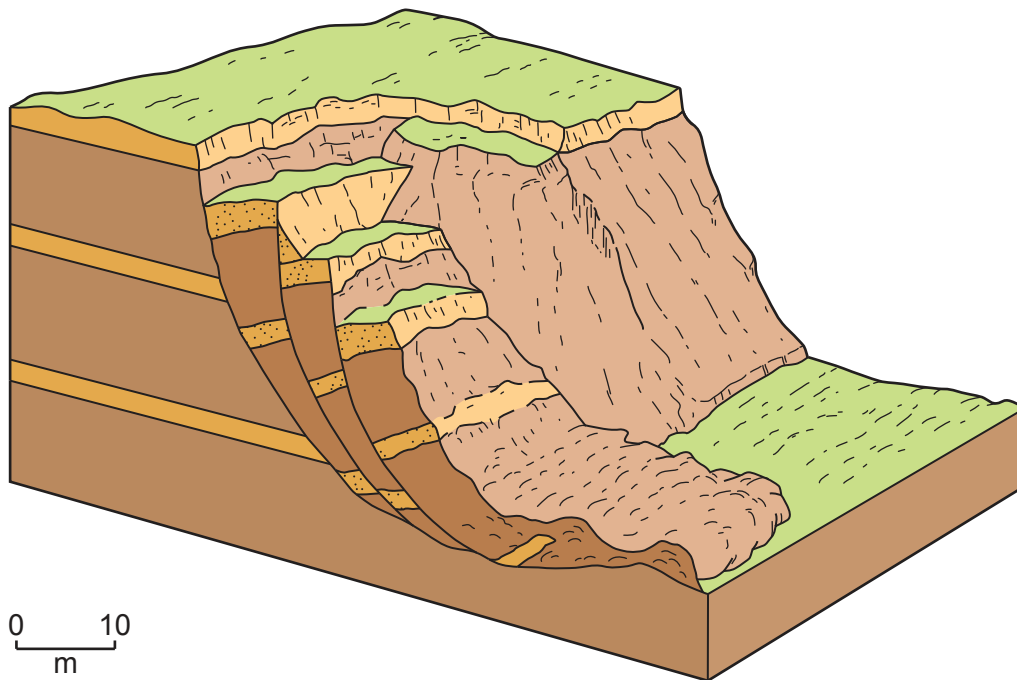


Fig. 10.1 for Question 10

A landscape in a semi-arid environment, Anza-Borrego Desert, California, USA



BLANK PAGE

The boundaries and names shown, the designations used and the presentation of material on any maps contained in this question paper/insert do not imply official endorsement or acceptance by Cambridge Assessment International Education concerning the legal status of any country, territory, or area or any of its authorities, or of the delimitation of its frontiers or boundaries.

Permission to reproduce items where third-party owned material protected by copyright is included has been sought and cleared where possible. Every reasonable effort has been made by the publisher (UCLES) to trace copyright holders, but if any items requiring clearance have unwittingly been included, the publisher will be pleased to make amends at the earliest possible opportunity.

To avoid the issue of disclosure of answer-related information to candidates, all copyright acknowledgements are reproduced online in the Cambridge Assessment International Education Copyright Acknowledgements Booklet. This is produced for each series of examinations and is freely available to download at www.cambridgeinternational.org after the live examination series.

Cambridge Assessment International Education is part of Cambridge Assessment. Cambridge Assessment is the brand name of the University of Cambridge Local Examinations Syndicate (UCLES), which is a department of the University of Cambridge.